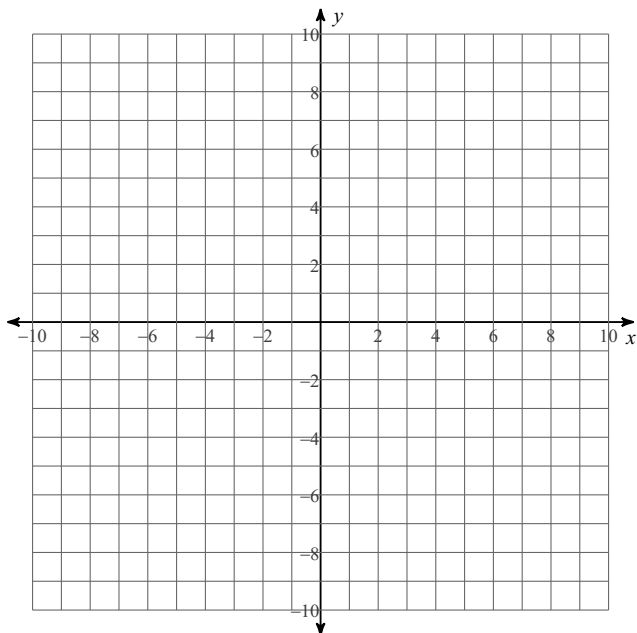


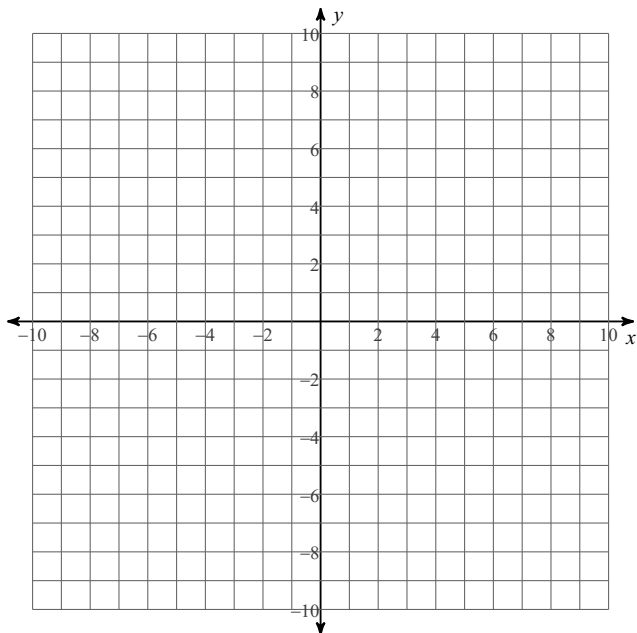
The Coordinate Plane Blitz

Plot each point.

- 1) $D(-6, 4)$ $E(8, 9)$ $F(-5, -8)$
 $G(10, 9)$ $H(9, 7)$ $I(9, 9)$
 $J(-9, 7)$ $K(8, -1)$ $L(3, 8)$
 $M(4, 5)$

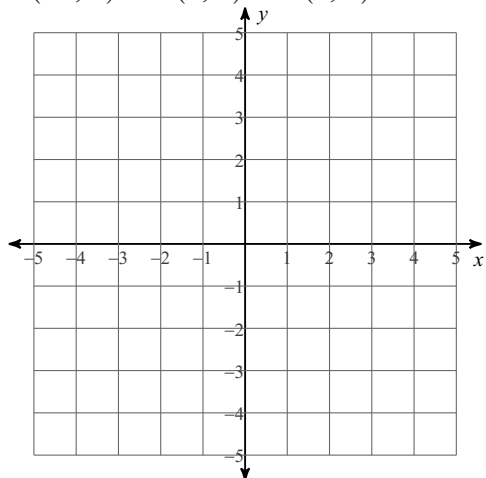


- 2) $E(3, 10)$ $F(3, -9)$ $G(6, 10)$
 $H(-2, 3)$ $I(-2, 7)$ $J(9, -5)$
 $K(2, 5)$ $L(-5, -1)$ $M(-6, -10)$
 $N(-8, 1)$

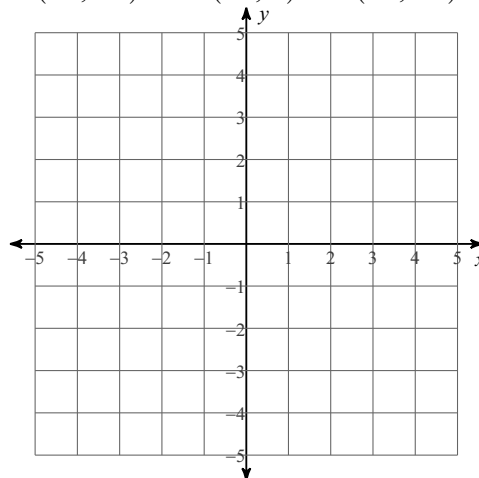


State the quadrant or axis that each point lies in.

3) $T(-2, 1)$ $S(5, 1)$ $R(1, 1)$

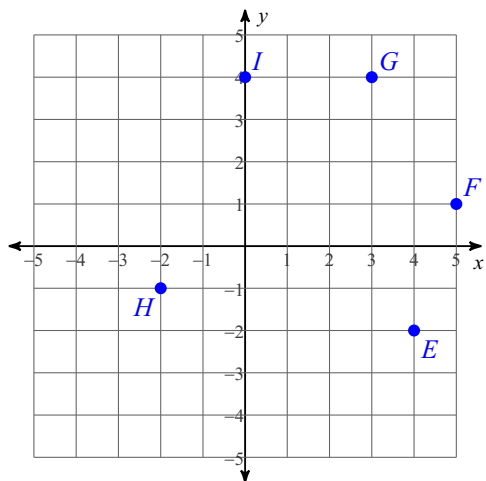


4) $N(-4, -2)$ $M(-4, 4)$ $L(-3, -3)$



State the coordinates of each point.

5)



6)

